

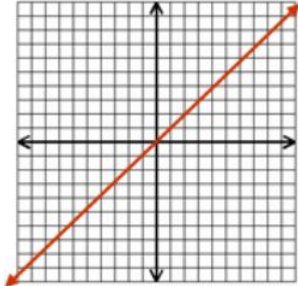
# ALGEBRA 2 HONORS

Name \_\_\_\_\_

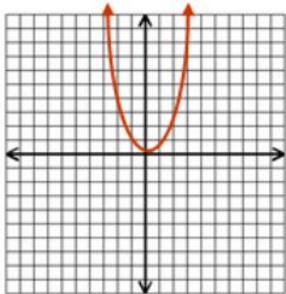
## 1.2 – PARENT FUNCTIONS

Identify the name, equation, domain and range of each of the following parent functions.

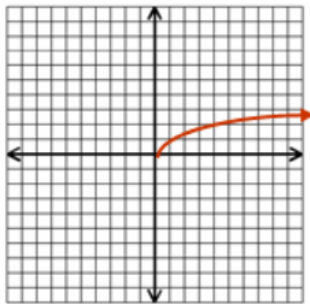
1.



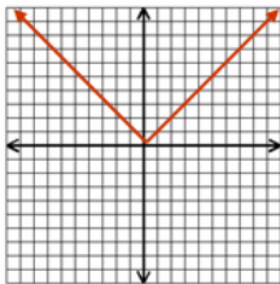
2.



3.



4.



Name \_\_\_\_\_

**Graph each of the following parent functions.**

**5.**  $y = \sqrt{x}$

**6.**  $y = \frac{1}{x}$

**7.**  $y = |x|$

**8.**  $y = x^2$